

ST MARY'S KINDERGARTEN DIAMOND PARK

Class : UKG
Date : 08/02/2022

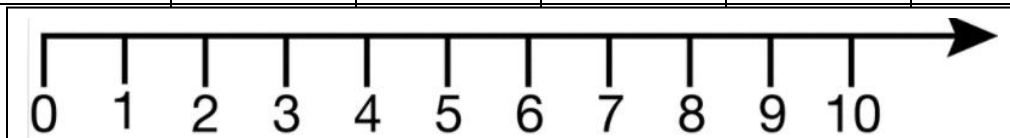
Session : 2021 – 2022
Worksheet : 32

SUBJECT: MATHS

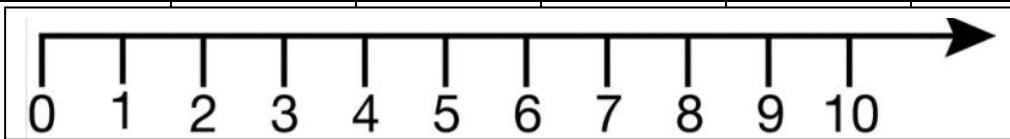
	Topic: Write the expanded form of the following number			
	81	=		
	69	=		
	77	=		
	20	=		
	35	=		
	12	=		

Addition using number line:-

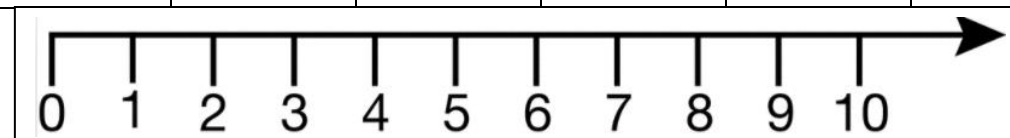
$$4 + 2 =$$



$$3 + 5 =$$



$$6 + 3 =$$



Write the multiplication table of 3

[illegible]